

Nets of solids

Name :

Class :

Date :

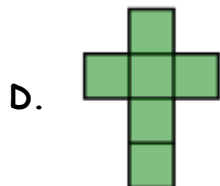
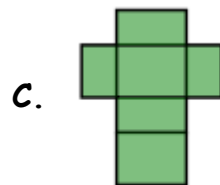
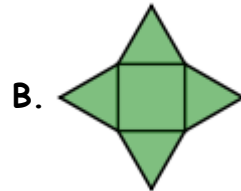
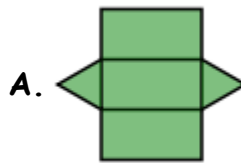
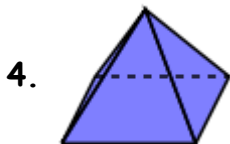
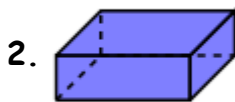
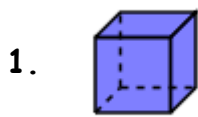
Mark :

/3

%

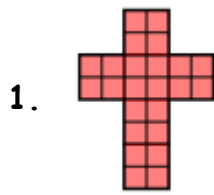
1) Match the 3D shapes with the nets

[1]

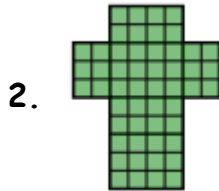


2) Match the nets with the types of cuboids


[1]



A. square based cuboid



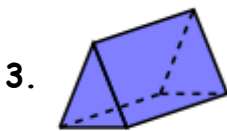
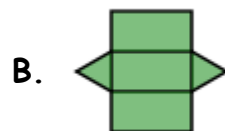
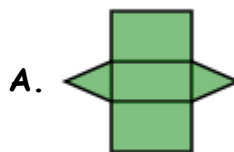
B. cube



C. rectangular based cuboid

3) Match the nets with the prisms

[1]



Solutions for the assessment YR5 NC41 - Nets of solids

1) 1 D, 2 C, 3 A, 4 B

2) 1 B, 2 C, 3 A

3) 1 C, 2 B, 3 A